

OCR

Oxford Cambridge and RSA

Friday 17 May 2024 – Morning

GCSE (9–1) Chemistry A (Gateway Science)

J248/03 (Higher Tier)

Time allowed: 1 hour 45 minutes

You must have:

- a ruler (cm/mm)
- the Data Sheet for GCSE (9–1) Chemistry A (inside this document)

You can use:

- a scientific or graphical calculator
- an HB pencil

H



Please write clearly in black ink. **Do not write in the barcodes.**

Centre number

--	--	--	--	--

Candidate number

--	--	--	--

First name(s)

Last name

INSTRUCTIONS

- Use black ink. You can use an HB pencil, but only for graphs and diagrams.
- Write your answer to each question in the space provided. If you need extra space use the lined pages at the end of this booklet. The question numbers must be clearly shown.
- Answer **all** the questions.
- Where appropriate, your answer should be supported with working. Marks might be given for using a correct method, even if your answer is wrong.

INFORMATION

- The total mark for this paper is **90**.
- The marks for each question are shown in brackets [].
- Quality of extended response will be assessed in questions marked with an asterisk (*).
- This document has **28** pages.

ADVICE

- Read each question carefully before you start your answer.

Section A

You should spend a **maximum of 30 minutes** on this section.

Write your answer to each question in the box provided.

1 Which property is characteristic of a metal?

- A It forms acidic oxides.
- B It is brittle.
- C It is malleable.
- D It reacts with acid to form carbon dioxide gas.

Your answer

[1]

2 Graphite and graphene are allotropes of carbon.

Which statement is correct about graphite and graphene?

- A Graphite has delocalised electrons, graphene uses all electrons in bonding.
- B Graphite has four bonds from each carbon atom, graphene only has three.
- C Graphite is a giant covalent structure, graphene is not.
- D Graphite is made up of layers, graphene is a single layer.

Your answer

[1]

3 A lithium ion is Li^+ and a phosphate ion is PO_4^{3-} .

What is the formula of lithium phosphate?

- A $\text{Li}(\text{PO}_4)_3$
- B Li_2PO_4
- C $\text{Li}_2(\text{PO}_4)_3$
- D Li_3PO_4

Your answer

[1]

4 Which statement about a **reducing agent** is correct?

- A It oxidises another species and is itself oxidised.
- B It oxidises another species and is itself reduced.
- C It reduces another species and is itself oxidised.
- D It reduces another species and is itself reduced.

Your answer

[1]

5 Which statement about **alkalis** is correct?

- A They form H^+ ions in solution.
- B They have a pH value greater than 7.
- C They react with metals to form a salt and hydrogen.
- D They turn universal indicator red.

Your answer

[1]

6 Which equipment is needed to set up an electrolysis experiment?

- A A battery, a beaker, a funnel and wires
- B A battery, a beaker, electrodes and wires
- C A battery, crocodile clips, electrodes and a thermometer
- D A beaker, electrodes, a funnel and a thermometer

Your answer

[1]

7 Which products are formed in the electrolysis of sodium chloride solution?

	Anode	Cathode
A	chlorine	hydrogen
B	chlorine	sodium
C	oxygen	hydrogen
D	oxygen	sodium

Your answer

[1]

8 How did Mendeleev group elements together to develop his Periodic Table?

- A Based on chemical properties and left gaps
- B Based on mass number and atomic number
- C Based on physical properties and atomic number
- D Based on physical properties and left gaps

Your answer

[1]

9 What is the mass of one atom of beryllium, Be?

Relative atomic mass (A_r): Be = 9.0.

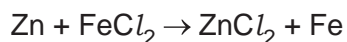
The Avogadro constant is 6.02×10^{23} .

- A 6.64×10^{-24} g
- B 1.50×10^{-23} g
- C 2.41×10^{24} g
- D 5.42×10^{24} g

Your answer

[1]

- 10 Zinc reacts with iron chloride to form zinc chloride and iron.



What is the **balanced ionic equation** for this reaction?

- A $\text{Zn} + \text{Fe}^+ \rightarrow \text{Zn}^+ + \text{Fe}$
 B $\text{Zn} + \text{Fe}^{2+} \rightarrow \text{Zn}^{2+} + \text{Fe}$
 C $\text{Zn} + 2\text{Fe}^+ \rightarrow \text{Zn}^{2+} + 2\text{Fe}$
 D $2\text{Zn} + \text{Fe}^{2+} \rightarrow 2\text{Zn}^+ + \text{Fe}$

Your answer

[1]

- 11 Molten aluminium oxide, Al_2O_3 , is electrolysed.

Which row of the table shows the reactions at the electrodes?

	Cathode	Anode
A	$\text{Al}^{3+} + 3\text{e}^- \rightarrow \text{Al}$	$\text{O}^{2-} \rightarrow \text{O}_2 + 2\text{e}^-$
B	$\text{Al}^{3+} \rightarrow \text{Al} + 3\text{e}^-$	$\text{O}^{2-} + 2\text{e}^- \rightarrow \text{O}_2$
C	$\text{Al}^{3+} + 3\text{e}^- \rightarrow \text{Al}$	$2\text{O}^{2-} \rightarrow \text{O}_2 + 4\text{e}^-$
D	$\text{Al}^{3+} \rightarrow \text{Al} + 3\text{e}^-$	$2\text{O}^{2-} + 4\text{e}^- \rightarrow \text{O}_2$

Your answer

[1]

- 12 An element has the electronic configuration 2.8.4.

Which group and period is the element in?

- A Group 2 as it has 2 electron shells. Period 4 as it has 4 electrons in the outer shell.
 B Group 2 as it has 2 electrons in the outer shell. Period 4 as it has 4 electron shells.
 C Group 4 as it has 4 electron shells. Period 3 as it has 3 electrons in the outer shell.
 D Group 4 as it has 4 electrons in the outer shell. Period 3 as it has 3 electron shells.

Your answer

[1]

- 13 Copper nitrate decomposes into copper oxide, nitrogen dioxide and oxygen.



How many moles of products are formed if 18 mol of copper nitrate decomposes?

	CuO (mol)	NO ₂ (mol)	O ₂ (mol)
A	18	18	18
B	18	36	9
C	36	18	9
D	36	36	18

Your answer

[1]

- 14 Solutions can have different pH values.

Which two solutions have concentrations of H⁺ ions that differ by a factor of 100?

- A pH 1 and pH 2
- B pH 1 and pH 4
- C pH 2 and pH 4
- D pH 3 and pH 6

Your answer

[1]

- 15 At 25 °C, fluorine is a gas, bromine is a liquid and iodine is a solid.

Which statement is correct?

- A At 25 °C, bromine does not have enough heat energy to melt.
- B At 25 °C, fluorine does not have enough heat energy to condense.
- C Bromine has a higher boiling point than fluorine and a higher melting point than iodine.
- D Iodine has a higher boiling point than bromine and a higher melting point than fluorine.

Your answer

[1]

7
BLANK PAGE

PLEASE DO NOT WRITE ON THIS PAGE

GRADEUP.UK

8
Section B

16

(a) A scientist investigates dissolving four different tablets in water.

Each tablet has a different surface area.

They add each tablet to 20 cm³ of water and time how long it takes for the tablet to dissolve.

The table shows their results.

Tablet	Surface area of tablet (cm ²)	Volume of tablet (cm ³)	Surface area to volume ratio	Time taken to dissolve (seconds)
A	2.8	0.3	9.33 : 1	43
B	2.5	0.2	12.5 : 1	27
C	1.5	0.2		62
D	3.0	0.2	15.0 : 1	

(i) Calculate the surface area to volume ratio of tablet C.

Surface area to volume ratio = [2]

(ii) Complete the sentence to describe the relationship between the surface area to volume ratio and the time taken to dissolve.

As the surface area to volume ratio ,
the tablet will take time to dissolve. [1]

(iii) The scientist thinks that tablet D will dissolve **slowest** in 20cm³ of water.

Explain why the scientist is **incorrect**.

.....
.....
.....

[2]

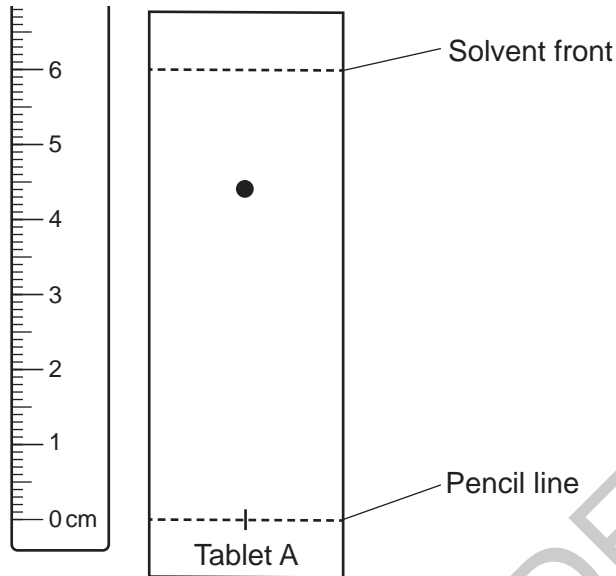
(b) The scientist performs thin layer chromatography on solutions of each of the tablets.

(i) The spots on the chromatogram are **colourless**.

State what the scientist could use to see the spots.

..... [1]

(ii) After the scientist uses a method to see the spots, the chromatogram for Tablet A is shown.



Calculate the R_f value for the spot seen from tablet A.

R_f value = [3]

10

17 A student wants to separate a mixture of compounds.

Different separation methods are used depending on the mixture.


(a) Draw lines to connect each **separation method** to the correct **mixture**.

Separation method	Mixture
Crystallisation	Insoluble solid and liquid
Filtration	Solution containing a soluble solid dissolved in a liquid
Fractional distillation	Three liquids with different boiling points

[2]

(b) The student decides to use simple distillation to separate a mixture.

They set up the apparatus shown in the diagram.



(i) A liquid in the mixture is **flammable**.

Suggest a change the student could make to the apparatus to make the distillation safer.

.....
 [1]

- (ii) The student wants to record the boiling point of the pure liquid that is collected in the collection flask.

Suggest an improvement the student could make to the apparatus so that they can record the boiling point.

.....
..... [1]

- (c) The pure liquid collected has the molecular formula $(C_2H_5)_2O$ and a boiling point of $35^\circ C$.

Which statements about the pure liquid are **correct**?

Tick (✓) **two** boxes.

The empirical formula is CH_2 .

The melting point is lower than $35^\circ C$.

The pure liquid contains two compounds.

The pure liquid is an element.

The pure liquid will be a gas at above $35^\circ C$.

[2]

- (d) Calculate the relative formula mass of a $(C_2H_5)_2O$ molecule.

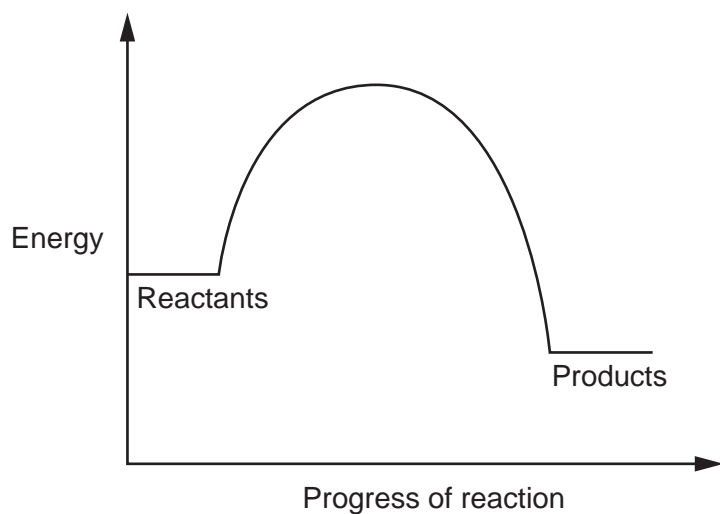
Relative atomic mass (A_r): C = 12.0 H = 1.0 O = 16.0

Relative formula mass = [3]

18 A scientist is studying two chemical reactions.

One reaction is exothermic, and one reaction is endothermic.

(a) The reaction profile for the exothermic reaction is shown.



(i) Explain how you can tell the reaction profile is for an **exothermic** reaction.

.....
 [1]

(ii) Describe **one** difference and **one** similarity the scientist will see in the reaction profile for the endothermic reaction.

Difference

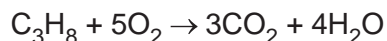
.....

Similarity

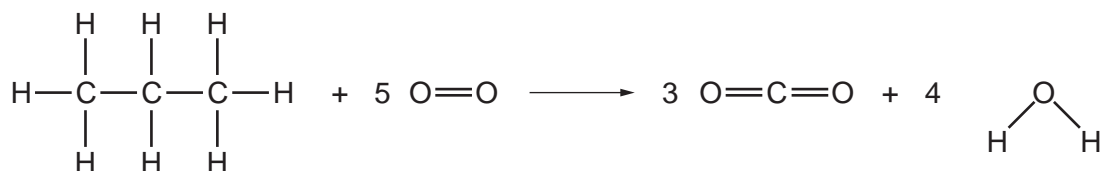
..... [2]

(b) One of the reactions the scientist is studying is the combustion of propane.

This is the balanced symbol equation for the reaction.



The equation can be written using the following formulas.



The table shows the bond energies.

Bond	C–C	C–H	O=O	C=O	O–H
Bond energy (kJ/mol)	347	412	498	799	465

(i) Calculate the energy transferred when all the bonds form in the products.

Energy transferred = kJ/mol [3]

(ii) The energy transferred when all the bonds break in the reactants is 6480 kJ/mol.

Use your answer to part (b)(i) to calculate the energy change for this reaction.

Energy change = kJ/mol [2]

(c) A student studies a different reaction.

They want to find out if it is exothermic or endothermic.

(i) Some possible steps for a method are given in the list.

Write **five** steps from the list in the correct order to describe the method the student should use.

- A** Add the solid to the solution.
- B** Cover the top of the reaction with a lid.
- C** Cover the top of the reaction with cotton wool.
- D** Put on safety goggles.
- E** Put the solution into a beaker and use a thermometer to record the temperature before the reaction starts.
- F** Put the solution into a polystyrene cup and use a thermometer to record the temperature before the reaction starts.
- G** Use a thermometer to record the temperature as the reaction progresses.

Step 1

Step 2

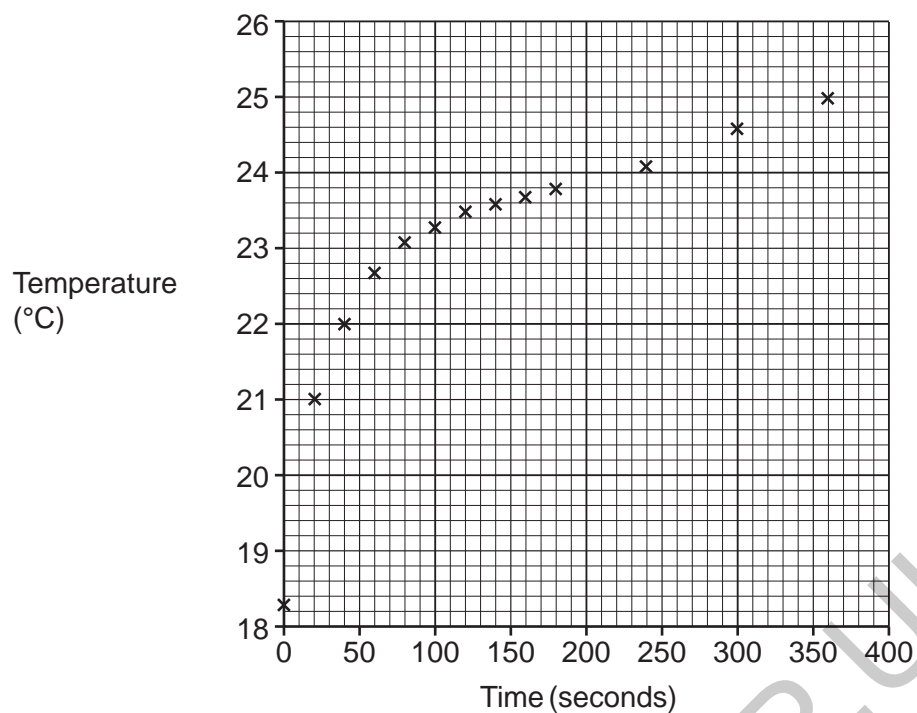
Step 3

Step 4

Step 5

[3]

(ii) The student plots their results on a graph.



The student concludes that the reaction is **exothermic**.

Explain why the student is **correct**.

.....

.....

.....

.....

[2]

19 Many scientists were involved in the development of the atomic model.

(a) Describe **two** ways Rutherford's atomic model was an improvement on Thomson's "plum pudding" atomic model.

1

.....

2

.....

[2]

(b) Atoms are either oxidised or reduced to form ions.

(i) Complete the sentences about how atoms form ions.

Atoms are to form positive ions. Atoms

electrons to form positive ions.

Atoms are to form negative ions. Atoms

electrons to form negative ions.

[2]

(ii) The table shows information about three different ions.

Complete the table.

Ion	Number of protons	Number of neutrons	Number of electrons	Mass number
Mg ²⁺	12	10	24
F ⁻	9	10	19
Li ⁺	3	4	2

[2]

(iii) The element lithium exists as isotopes.

State one difference and one similarity between the Li⁺ ions formed from different isotopes of lithium.

Difference

.....

Similarity

.....

[2]

(iv) A sample of magnesium metal is 5.2 cm wide.

Estimate how many Mg^{2+} ions would fit across the width of the sample of magnesium metal.

Use your knowledge of the typical radius of atoms in your calculation.

Estimated number of Mg^{2+} ions = [3]

(c) Ions are also formed when acids and alkalis dissolve in water.

(i) Which statements about acid solutions are **correct**?

Tick (✓) **two** boxes.

A dilute solution has a low ratio of acid to volume of solution.

A dilute solution of acid contains more acid than a concentrated solution.

A strong acid can be made into a concentrated solution or a dilute solution.

A strong acid partially ionises in solution.

A weak acid can only be made into a dilute solution.

[2]

(ii) A student makes an acid solution with a pH of 3.

Describe two things the student could do to make a solution with a lower pH.

1

.....

2

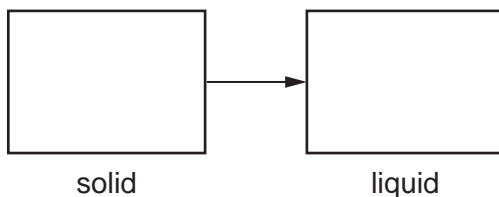
.....

[2]

20

(a) The particle model can be used to show changes of state.

(i) Complete the diagram to show what happens to the particles as a solid changes to a liquid.



[2]

(ii) Which statements about changes of state are **correct**?

Tick (✓) **two** boxes.

Boiling describes a gas turning into a liquid.

Freezing is a chemical change.

Melting is a physical change.

The amount of energy needed to melt a substance depends on the strength of the forces between particles.

The arrangement of particles becomes more random during condensing.

[2]

(iii) The particle model has limitations when showing changes of state.

Explain **two** limitations of the particle model.

1

.....

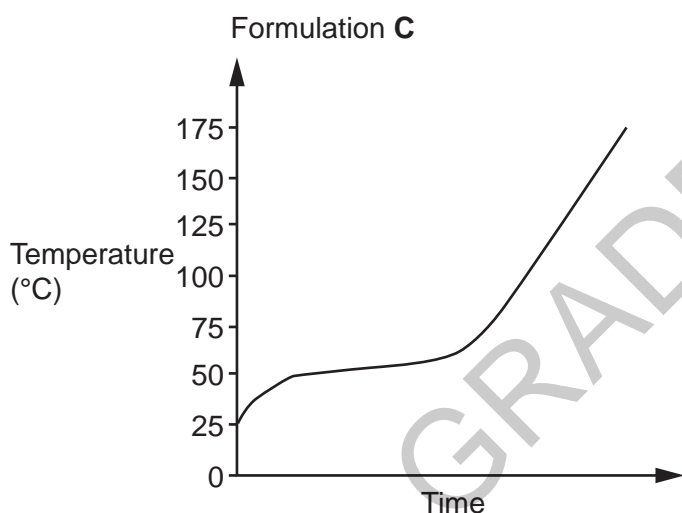
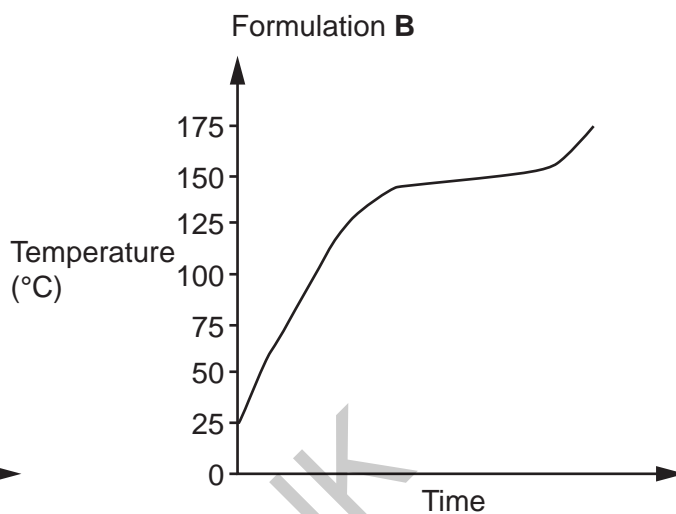
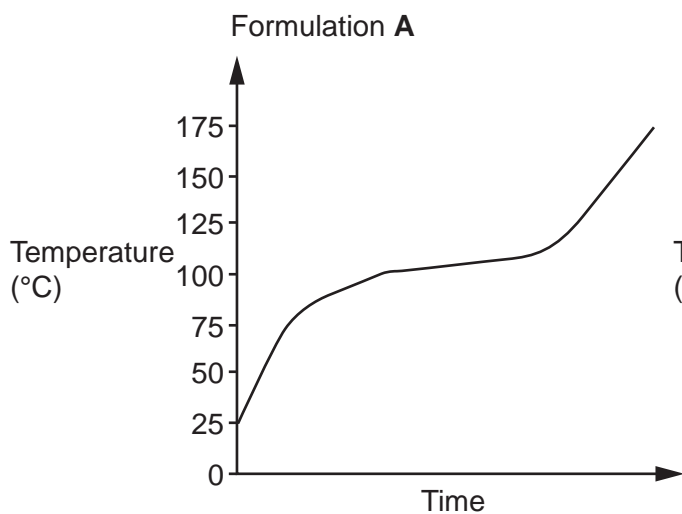
2

.....

[2]

(b) A scientist needs to choose a **solid** formulation that will be used at **high** temperatures.

The graphs show how the temperature changes as three different formulations, **A**, **B** and **C**, are heated.



Which formulation should the scientist choose?

Explain your answer.

Formulation

Explanation

.....

.....

.....

[2]

(b)

(i) Magnesium chloride is an ionic compound.

Explain why ionic compounds can conduct electricity when dissolved in water, but **not** when solid.

.....

.....

.....

.....

..... [3]

(ii) Construct the dot and cross diagram for the ions in magnesium chloride, MgCl_2 .

Show the outer electron shells only.

Dot and cross diagram:

GRADEUP.UK

[2]

22 A student is making a sample of magnesium carbonate, MgCO_3 .

The table gives information about four different methods the student could use.

Method	Cost of starting materials (£)	Mass of MgCO_3 produced (g)	Is the MgCO_3 pure?
1	12.11	6.24	yes
2	11.37	16.90	no
3	15.23	15.34	yes
4	20.50	10.86	no

(a) Which method should the student use to make their sample?

Explain your answer.

Method

Reason.....

[3]

(b) A teacher shows the student how to purify magnesium carbonate.

If the student knows how to purify magnesium carbonate, should they use the **same** method as they used in part (a)?

Explain your answer.

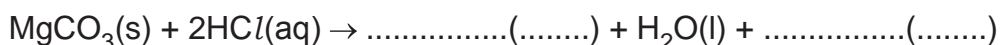
.....

[1]

(c) The student reacts the magnesium carbonate they have made with hydrochloric acid.

(i) Complete the **balanced equation**.

Include state symbols.



[2]

- (ii) The student uses 0.2 mol of hydrochloric acid in the reaction. The hydrochloric acid is the **limiting reagent**.

At the end of the reaction, 0.82 g of magnesium carbonate is left unreacted.

Calculate the mass of magnesium carbonate that the student uses in the reaction.

Relative atomic mass (A_r): C = 12.0 Mg = 24.3 O = 16.0

Mass of magnesium carbonate = g [4]

END OF QUESTION PAPER

EXTRA ANSWER SPACE

If you need extra space use these lined pages. You must write the question numbers clearly in the margin.

A large area of the page is filled with horizontal dotted lines for writing. A solid vertical line runs down the left side of this area, creating a margin. A large, light grey watermark reading "GRADEUP.UK" is oriented diagonally across the center of the page.

Handwriting practice lines consisting of a solid vertical line on the left and horizontal dotted lines extending across the page.

GRADEUP.UK

Blank writing area with horizontal dotted lines and a vertical solid line on the left side.

GRADEUP.UK

OCR

Oxford Cambridge and RSA

Copyright Information

OCR is committed to seeking permission to reproduce all third-party content that it uses in its assessment materials. OCR has attempted to identify and contact all copyright holders whose work is used in this paper. To avoid the issue of disclosure of answer-related information to candidates, all copyright acknowledgements are reproduced in the OCR Copyright Acknowledgements Booklet. This is produced for each series of examinations and is freely available to download from our public website (www.ocr.org.uk) after the live examination series.

If OCR has unwittingly failed to correctly acknowledge or clear any third-party content in this assessment material, OCR will be happy to correct its mistake at the earliest possible opportunity.

For queries or further information please contact The OCR Copyright Team, The Triangle Building, Shaftesbury Road, Cambridge CB2 8EA.

OCR is part of Cambridge University Press & Assessment, which is itself a department of the University of Cambridge.